


Reception Challenges

Week Beg. 8th June, 2020

Supertato



Talk about:

Read the story Supertato again. If you don't have the book listen to it on:

https://www.youtube.com/channel/UCR3zV0XE33EA0qtbsALbEvg?view_as=subscriber

<https://www.youtube.com/watch?v=rze89HB9u8g>

Retell the story to a brother or sister or grown-up. Remember to include the beginning, middle and end of the story.

Write:

This week we are learning to write our own Supertato story. Use the planning grid to draw pictures of what happens in the beginning, middle and end of your story.

Use your planning grid to help you write a three sentence story. Start each sentence with the following openers:

One day (*introduce your characters and setting*)

Suddenly (*the problem or bad thing that happens*)

Luckily (*how the problem is solved*)


Draw:

Learn to draw different vegetables with the help of YouTube:



<https://www.youtube.com/watch?v=yvWYykGQfhg>

Make:




Make your own Supertato by cutting out and sticking the different body parts in your pack.

Draw and Paint

Find some real vegetables at home. Observe (look) at the vegetable you have chosen and carefully draw what you can see on a piece of paper.

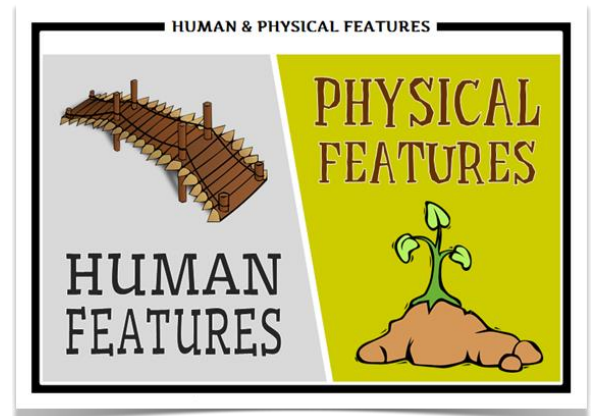
If you have paint, carefully paint your vegetable. Remember to use the correct colours if you can.



Geography:

This week we are learning about the physical and human features of our local environment.

Physical features or landforms are naturally created features of the Earth such as hills, beaches and mountains.



Human features are things that have been built by humans, they would not exist in nature without humans.

Use the word and picture maps to learn about different physical and human features.

Cut out the smaller pictures and sort them into two groups – human geographical features and physical geographical features. You can stick them onto the sheets in your pack.

Spelling:

Watch the Mr Thorne Does Phonics video for spelling words with the ou sound.

<https://www.youtube.com/watch?v=DezS9N7eI5Y>

Have a go at using the Look, Cover, Write, Check sheet to spell words with ou.

Handwriting:

Practise writing the Curly Caterpillar Letters – s, g, q, e, f. Start practising writing the lower-case letters and then have a go at the capital letters. Remember to start at 1 o'clock. If you can, try to make your letters a similar size and position them on the line correctly.



S G Q E F

Maths: Subtracting

This week we are learning to subtract using a number line to help us. Watch my video on YouTube to find out how to use a number line successfully to find the answers to the following questions.

Use your number line to find the answers to the following:

$$5 - 2 =$$
















$$7 - 1 =$$

$$8 - 3 =$$

$$10 - 4 =$$

$$10 - 5 =$$

Maths Challenges: Subtraction Problems

<p>Sammy the giraffe has 5 spots. Timmy the giraffe has 6 spots. How many spots are there in total?</p> 	<p>There were 7 stars in space. An alien spaceship zapped 3 away! How many stars were left?</p> 	<p>The happy penguin ate 4 fish. His friend ate 5 fish. How many fish did they eat in total?</p> 
<p>Jim had 8 sweets. Lee gave him 4 more. How many sweets has Jim got now?</p> 	<p>Liz had 11 slices of pizza. She ate 5 slices. How many does she have left now?</p> 	<p>Tom had 13 cars. Jen gave him 4 more. How many cars has he got now?</p> 
<p>Sam saw 15 rabbits in the field. 7 rabbits hopped away. How many are left in the field?</p> 	<p>Jack had 17 magic beans. He accidentally dropped 4. How many does he have left?</p> 	<p>Ben cycles 16 miles to school. Bob cycles 21 miles to school. How many miles less does Ben cycle?</p> 
<p>Abi plays outside for 15 minutes. Joe plays outside for 22 minutes. How many minutes longer is Joe outside?</p> 	<p>Zoe bakes 12 cookies for her friends. Pip eats 6. How many are left?</p> 	<p>Ashley had 16 colouring pencils. Joe takes 7 to use. How many does Ashley have left?</p> 
<p>Toby catches 9 mice. 4 of the mice escape. How many does Toby have now?</p> 	<p>The yellow flower has 10 petals. The blue flower has 3 petals. How many less does the blue flower have?</p> 	<p>The villain caught 14 people. The superhero rescued 8. How many does the villain still have?</p> 

Extra Resources

Maths

White Rose Maths: Summer Term Week 1 -
Supertato

<https://whiterosemaths.com/homelearning/early-years/>

English

Oak National Academy: Space

<https://www.thenational.academy/online-classroom/reception/english#subjects>

Foundation

Oak National Academy: People who help us
Lesson One - Germs

<https://www.thenational.academy/reception/foundation/germs-reception-wk2-1>

