




Fantastic work from Dragonfly Class this week!



I measure these things with my pencils.

Can use non-standard units to measure the following items
You could use pasta, cubes, your hands, paper clips
Record your answers in the box
Think about other objects that you could measure

	2		1.5
	2		1
	2		10
	1.5		1
	2		8
	10		5



Compare lengths and heights

a) Which is the taller flower?

b) Which is the shorter tree?

c) Which is the longest ribbon?

d) Which is the taller tower?

3) Complete the sentences.

A

B

C

C is longer than B

A is the longest train.

B is the shortest train.

4) Complete the sentences.


Annie Rosie Mo

a) Rosie is the tallest.

b) Mo is taller than Annie

c) Annie is the shortest.

Compare the heights of your friends.



Compare lengths and heights

a) Which is the taller flower?

b) Which is the shorter tree?

c) Which is the longest ribbon?

d) Which is the taller tower?

3) Complete the sentences.

Annie Rosie Mo

ROSIE is the tallest.

b) Mo is taller than ANNIE

ANNIE is the shortest.

Compare the heights of your friends.

Mummy is the tallest, Knox is the shortest. I am taller than Knox.





Can use non-standard units to measure the following items
You could use pasta, cubes, your hands, paper clips
Record your answers in the box
Think about other objects that you could measure.

Shoe		pencil	4
Soft toy	4	jug	
Spoon	4	sofa	
book	6	cup	
shoe	5	chair	7
		A pillow or cushion	8



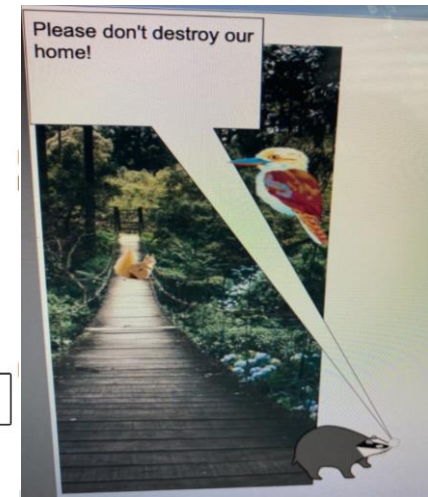
Rosie, Alex and Mo are comparing the height of Mrs Rose and Jack.

Rosie: Mrs Rose is tall than Jack. Mrs rose is taller than Jack.

Alex: Jack is short than Mrs Rose. Jack is shorter than Mrs Rose.

Mo: Mrs Rose is longer than Jack. Mrs Rose is Longer than Jack.

Can you improve their sentences to make them more accurate?



Compare lengths and heights

1 a) Which is the taller flower?

b) Which is the shorter tree?

c) Which is the longest ribbon?

d) Which is the taller tower?

2 Complete the sentences

A: [train] is longer than [train].

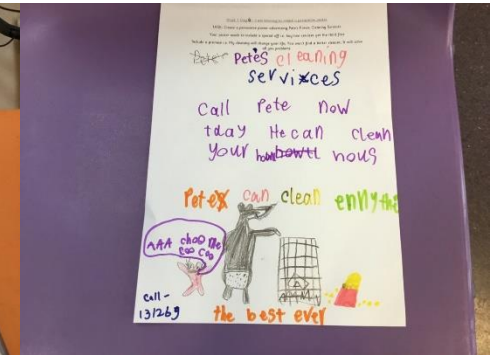

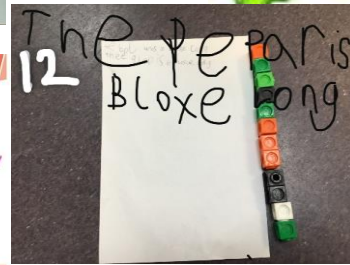
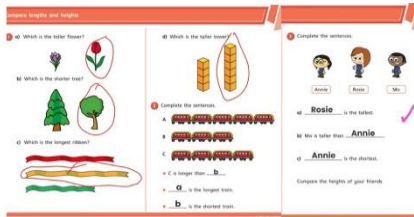


B: [train] is the longest train.

C: [train] is the shortest train.



WELL DONE TO A FANTASTIC WEEK DUCKS! WE ARE SO PROUD OF YOU!


Well done Frog Class for all your hard work this week!




This is a great Poster Mikail, I like your badger and the




We are very worried you won't believe Mikail did this by himself but we promise he did with the help of a how to draw a badger clip on YouTube. Mikail needed help spelling recycle and vacuum as he didn't want any wrong spellings on his poster.



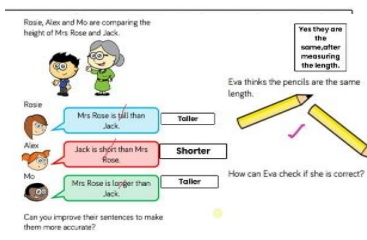
We compared the forest pictures all together.



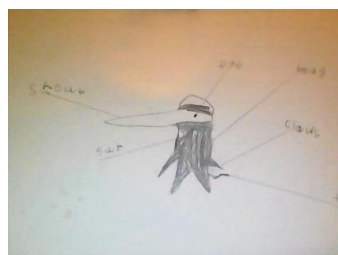


I am learning to compare the forest before and after



This is a lovely poster Benjamin.



This is a great Robot well done Theodore.



Great work, Herons, well done!



What can you see on the front cover?

- A big forest
- A black and white Badger
- Beautiful red leaves
- A rubbish bin to tidy up
- Colourful bushes

What kind of character do you think they will be?

I think the badger is going to be really helpful and very kind.

What do you want to find out?

What is the badger going to do in the forest?

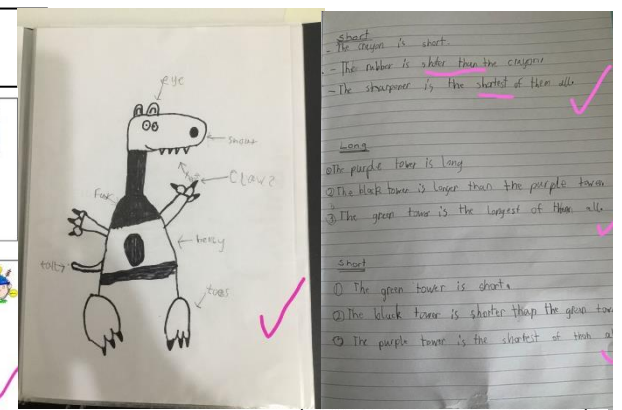
Does the badger meet any friends?

Where does the badger live?

What do you think will happen?

I think the badger will find a really big mess in the forest and he will tidy it all up.

I think he will meet some animal friends and they will help him tidy up.



Take photos and upload

I am learning to compare the forest before and after

Dull Grey Scary

Boring Dangerous

Choose a word to complete the sentences.

The pig is taller than the chick.

The cat is shorter than the pig.

taller shorter

Reece is comparing items at school.

He says,

The scissors are the shortest. The glue stick is the tallest.

Do you agree? Explain your answer.

Beautiful Blooming Green Clean

Keep it up!

YOUR TURN

Can you find 3 things shorter than you?



Can use non-standard units to measure the following items. You could use pasta, cubes, your hands, paper clips. Record your answers in the box. Think about other objects that you could measure.

Shoe	2 pairs of scissors	pencil	Tv controller
Soft toy	Arms	jug	Oranges
Spoon	Pasta	sofa	Alexa/people
book	Sticks	cup	Biscuits
shoe	2 pairs of scissors	chair	Cups
bed	Wrapping paper	A pillow or cushion	



Can use non-standard units to measure the following items. You could use pasta, cubes, your hands, paper clips. Record your answers in the box. Think about other objects that you could measure.

Shoe	pencil	five blocks
Soft toy	jug	6 blocks
Spoon	sofa	one pencil
book	cup	27 hands
shoe	chair	4 costers
		8 blocks
		5 coasters

a) Which is the taller flower?

b) Which is the shorter tree?

c) Which is the longest ribbon?

d) Which is the taller tower?

Complete the sentences.

A is longer than B.

B is the longest train.

C is the shortest train.

Complete the sentences.

a) Rosie is the tallest.

b) Mo is taller than Annie.

c) Annie is the shortest.

Compare the heights of your friends.

What can you see on the front cover?

TIDY

A badger cleaning up. Red, green leaves.

Kind Helpful

What do you want to find out?

If anyone helps the badger

What do you think will happen?

I think others will help badger eventually.



How did Pete feel during the story?

Sad

Happy in the end.

How do you think the other animal's feel? Why?

Worried because they could not get any food.

How would you feel? What would you do?

I would feel happy because the badger made the forest all tidy again by getting rid of the concrete.

I am learning to discuss a character's thoughts and feelings.

THOUGHTS AND FEELINGS



Learn how to compare the forest before and after.

Before

Many grey and black rubbish bags.

Bare trees.

Great comparison, well done!

Huge, pointy lumps of concrete.

i measured the table using clocks, it is 10 clocks long.

GOOD JOB!

Excellent!

Can use non-standard units to measure the following items. You could use pasta, cubes, your hands, paper clips. Record your answers in the box. Think about other objects that you could measure.

	My shoe is 2 gluesticks long.		My pencil is 7 Waltrose tokens long.
	My Teddy is 4 small tissue boxes long.		My jug is 1.5 gluesticks long.
	My teaspoon is 5 Waltrose tokens long.		My sofa is 13 hands long.
	My book is 2 small tissue boxes long.		My cup is 1 gluestick long.
	My other shoe is 5 Waltrose tokens long.		My chair is 4 hands long.
	My bed is 16 hands long.		My cushion is 3 small tissue boxes long.

Maths

Compare lengths and heights

1. a) Which is the taller flower?

b) Which is the shorter tree?

c) Which is the longest ribbon?

2. a) Which is the taller tower?

Complete the sentences.

A: B: C:

* C is longer than

* is the longest train.

* is the shortest train.

3. Complete the sentences.

a) is the tallest.

b) is taller than .

c) is the shortest.

Compare the heights of your friends.

Newt Class work this week...

spotless

neat

beautiful

colourful

tidy

happy

dazzling

Literacy

PETE'S CLEANING SERVICES

All types of rubbish collected. 6 years experience.

The number one Great Service.

Call - 0142377

THE BEST IN THE FOREST.

WOW, amazing work!

Pete's cleaning services

the hotfixer

He is the best cleaner call - the best bager 801802250

Petes Cleaning Services

his amazing

keep the forest clean

Fantastic!

eye

Shout

do body

tail

claws

Science

Super drawing and labelling!

ears

body

eyes

Shout

sur

paws

claws

Computing

Let's save our forest home.

It's where our animals live, without the forests they will have no homes.

SAVE THE AMAZON RAINFOREST !!!

The Amazon is the largest rainforest in the world and home to 10% of all known species of plants and animals.

UNLESS WE CHANGE 25% of this Rainforest will be lost by 2030!

EAT LOCAL MEAT

Half of the world's land is cleared to graze cattle, support the Amazon by avoiding beef products.

REUSE PAPER

Paper is made from trees so use it carefully!

BUY A RAINFOREST

Get a patch of rainforest for your birthday and protect it from logging or mining!

Deforestation is BAD

We need trees to live.

AMAZING WORK